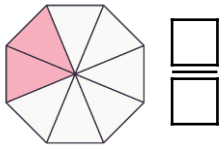


What is a Fraction?

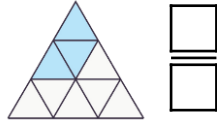
4. Shade and complete the shapes to represent the fractions below.

A.



$$\frac{5}{12}$$

B.



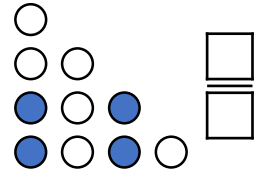
$$\frac{6}{8}$$

C.



$$\frac{7}{10}$$

D.



$$\frac{8}{9}$$

Write the correct fraction next to each shape.

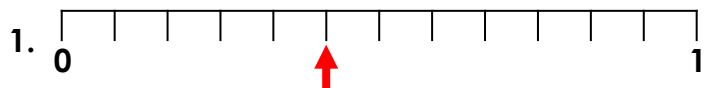


VF
HW/Ext

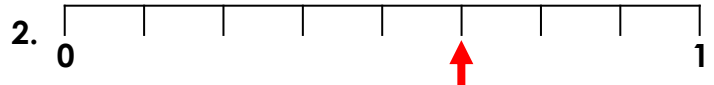
5. Match the number lines to the representations.

A.

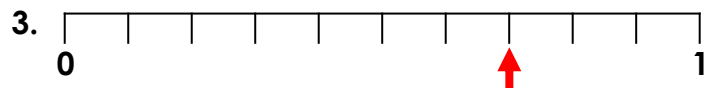
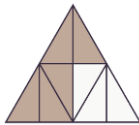
Out of 10 dogs, 7 are brown.



B.



C.



VF
HW/Ext

6. Sally and Boris are discussing the fraction represented below.




Boris

I think the fraction is $\frac{7}{10}$.



Sally

I think the fraction is $\frac{3}{10}$.



Who is correct? Explain your reasoning.



RPS
HW/Ext